

# Year 5 Homework

## Summer 2 Week 1

### Daily tasks:



Practise spellings



10 minutes in the Garage



Log my reading

### Weekly homework:

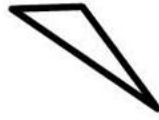
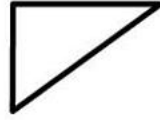
Quiz – Transatlantic Slave Trade

Homework in my homework book:

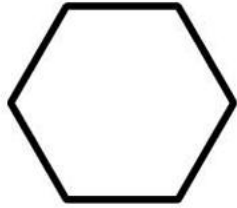
SAFE 13

Write your answers in your homework book.

1 Tick the isosceles triangle



2 What is the perimeter?



5cm

\_\_\_\_\_ cm

3  $4 \text{ kg} = \underline{\hspace{2cm}} \text{ g}$

$4 \frac{1}{2} \text{ kg} = \underline{\hspace{2cm}} \text{ g}$

$4 \frac{1}{4} \text{ kg} = \underline{\hspace{2cm}} \text{ g}$

4 Use decimal notation to show...

$\text{£}1 \text{ and } 46\text{p} =$

$374\text{p} =$

$\text{£}8 =$

5 How many days from September 5th until October 22nd?

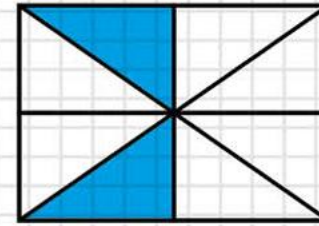
7 Which of these 3 analogue clocks show the equivalent time?

**15:08**



6 4 hours = \_\_\_\_\_ minutes  
 3 minutes = \_\_\_\_\_ seconds  
 \_\_\_\_\_ months = 5 years  
 \_\_\_\_\_ days = 4 weeks

8 What fraction of the shape is shaded?



$\frac{1}{2}$     $\frac{1}{4}$     $\frac{2}{4}$

9  $\frac{4}{5} + \frac{3}{5} =$

10  $\frac{3}{7} + \underline{\hspace{2cm}} = 1$

$1 - \underline{\hspace{2cm}} = \frac{2}{5}$

$53 \frac{2}{3} + \underline{\hspace{2cm}} = 60$